

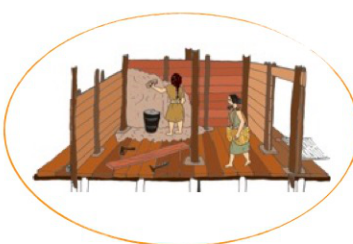


**OSSERVA ATTENTAMENTE IL DISEGNO RICOSTRUTTIVO DEL VILLAGGIO  
EDIFICATO SUL DOS GUSTINACI (DENOMINATO FIAVÉ 7).  
PROVA A METTERE IN ORDINE DA 1 A 6 LE FASI DI COSTRUZIONE!**



**RIORDINA LE  
FASI DA 1 A 6**